
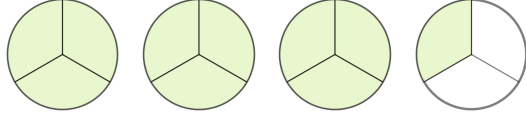

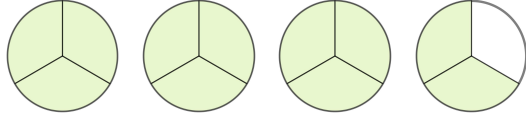

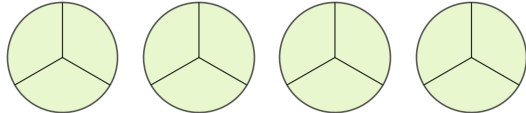


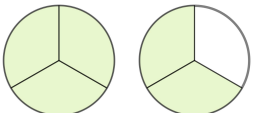
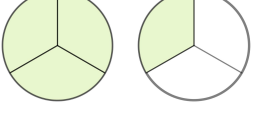
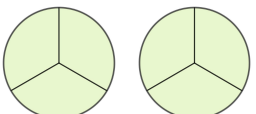



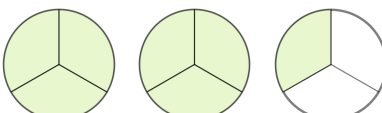
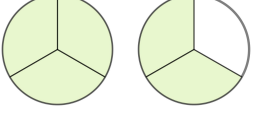
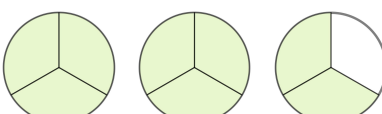

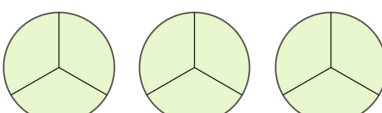
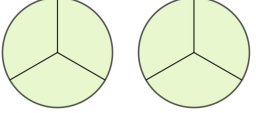
☺ 알맞은 가분수나 대분수를 쓰세요.

 $\frac{1}{3}$ 진분수	 $\frac{10}{3} = \square$ 가분수      대분수
 $\frac{2}{3}$ 진분수	 $\square = 3\frac{2}{3}$ 가분수      대분수
 $\frac{3}{3} = 1$ 가분수      자연수	 $\frac{12}{3} = \square$ 가분수      자연수

 $\frac{4}{3} = \square$ 가분수      대분수	
 $\square = 1\frac{2}{3}$ 가분수      대분수	 $\square = \square$ 가분수      대분수
 $\frac{6}{3} = \square$ 가분수      자연수	

 $\frac{7}{3} = \square$ 가분수      대분수	 $\square = \square$ 가분수      대분수
 $\square = 2\frac{2}{3}$ 가분수      대분수	
 $\frac{9}{3} = \square$ 가분수      자연수	 $\square = \square$ 가분수      자연수

정답

