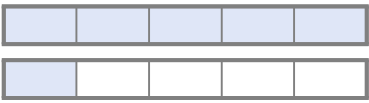


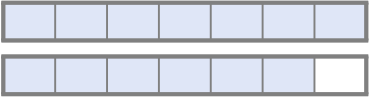
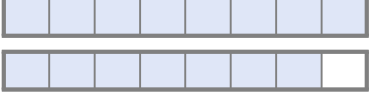
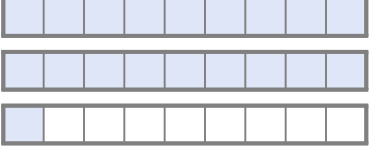

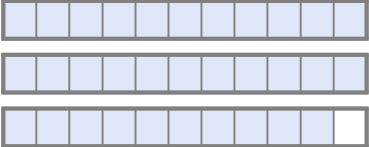
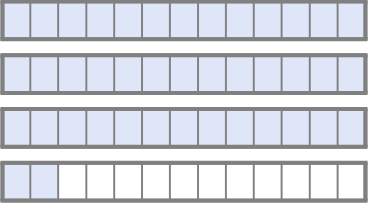
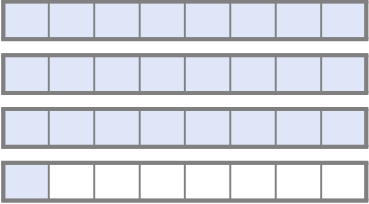

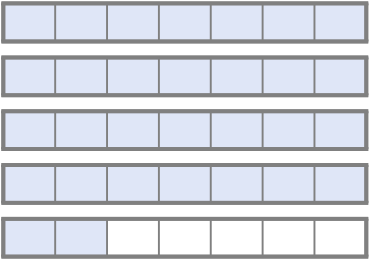


☺ 알맞은 가분수나 대분수를 쓰세요.

 $\frac{6}{5} = 1\frac{1}{5}$ <p>가분수      대분수</p>	 $1$
 $\frac{9}{6} = \square$ <p>가분수      대분수</p>	 $\square = 1\frac{6}{7}$ <p>가분수      대분수</p>
 $\square = 1\frac{7}{8}$ <p>가분수      대분수</p>	 $\frac{19}{9} = \square$ <p>가분수      대분수</p>
 $\square = \square$ <p>가분수      대분수</p>	 $\square = \square$ <p>가분수      대분수</p>
 $\square = \square$ <p>가분수      대분수</p>	 $\square = \square$ <p>가분수      대분수</p>
 $\square = \square$ <p>가분수      대분수</p>	 $\square = \square$ <p>가분수      대분수</p>

