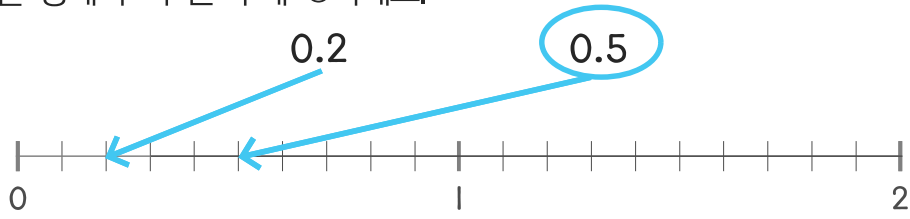


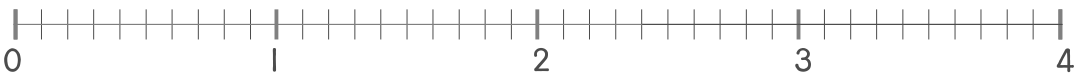
☺ 주어진 두 수는 수직선에서 어디에 있는지 선으로 나타내 보세요.
그리고 둘 중에서 더 큰 수에 ○하세요.



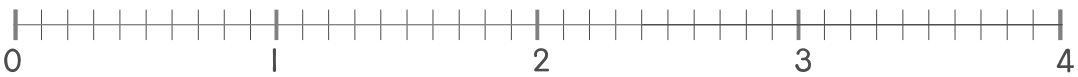
0.9 1.2



2 1.5



3.4 1



2.8 4.1



3.6 1.9

