



☺ 다음을 읽고 덧셈식을 만들어 보세요.

샌드위치 3개, 2개, 2개를 합하면  
모두 몇 개일까요?




$$\underline{3} + \underline{2} + \underline{2} = \underline{7}$$

샌드위치 4개, 2개, 2개를 합하면  
모두 몇 개일까요?




$$\underline{\quad} + \underline{\quad} + \underline{\quad} = \underline{\quad}$$

샌드위치 5개, 1개, 3개를 합하면  
모두 몇 개일까요?



$$\underline{\quad} + \underline{\quad} + \underline{\quad} = \underline{\quad}$$

샌드위치 1개, 3개, 4개를 합하면  
모두 몇 개일까요?



$$\underline{\quad} + \underline{\quad} + \underline{\quad} = \underline{\quad}$$

샌드위치 2개, 2개, 5개를 합하면  
모두 몇 개일까요?

$$\underline{\quad} + \underline{\quad} + \underline{\quad} = \underline{\quad}$$

샌드위치 3개, 1개, 3개를 합하면  
모두 몇 개일까요?

$$\underline{\quad} + \underline{\quad} + \underline{\quad} = \underline{\quad}$$

