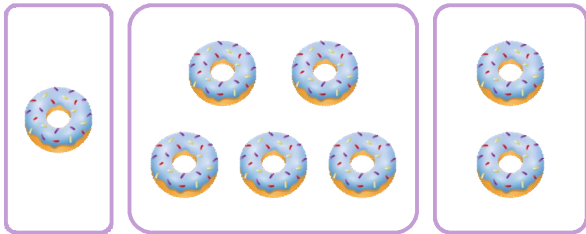


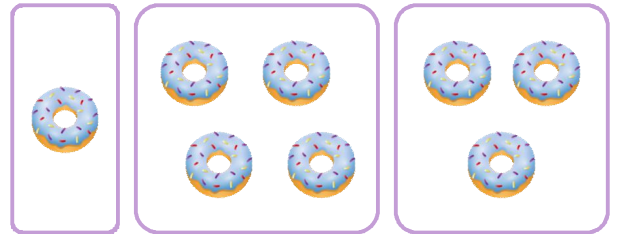
☺ 다음을 읽고 덧셈식을 만들어 보세요.

도넛 5개, 1개, 2개를 합하면
모두 몇 개일까요?



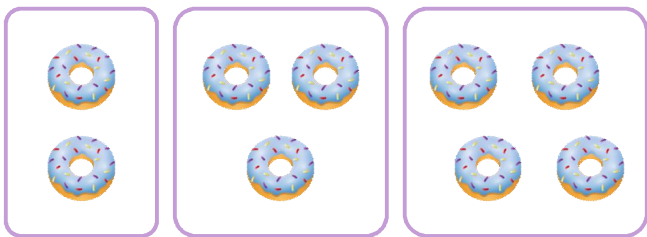
$$\underline{5} + \underline{1} + \underline{2} = \underline{8}$$

도넛 1개, 4개, 3개를 합하면
모두 몇 개일까요?



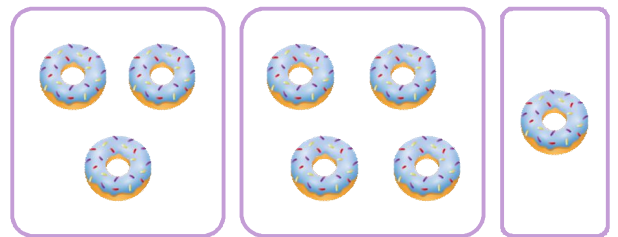
$$\underline{\quad} + \underline{\quad} + \underline{\quad} = \underline{\quad}$$

도넛 2개, 3개, 4개를 합하면
모두 몇 개일까요?



$$\underline{\quad} + \underline{\quad} + \underline{\quad} = \underline{\quad}$$

도넛 3개, 4개, 1개를 합하면
모두 몇 개일까요?



$$\underline{\quad} + \underline{\quad} + \underline{\quad} = \underline{\quad}$$

도넛 4개, 2개, 3개를 합하면
모두 몇 개일까요?

$$\underline{\quad} + \underline{\quad} + \underline{\quad} = \underline{\quad}$$

도넛 1개, 2개, 4개를 합하면
모두 몇 개일까요?

$$\underline{\quad} + \underline{\quad} + \underline{\quad} = \underline{\quad}$$

