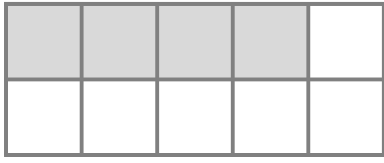
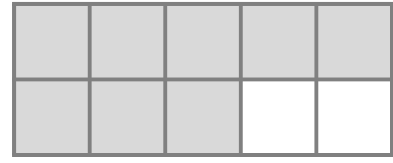


☺ 색칠한 칸과 색칠하지 않은 칸의 수를 세어 덧셈식을 만들어 보세요.




$$4 + 6 = 10$$

색칠한 칸 수 색칠하지 않은 칸 수

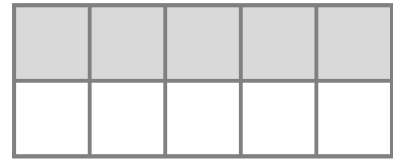


$$+ =$$

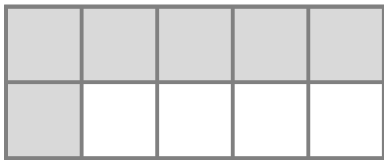
색칠한 칸 수 색칠하지 않은 칸 수




$$+ =$$



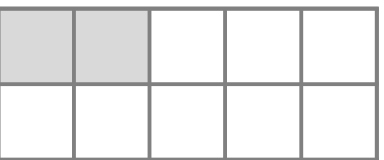
$$+ =$$



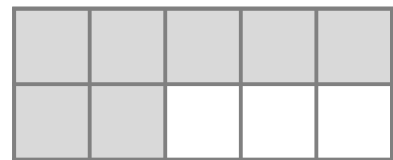
$$+ =$$



$$+ =$$



$$+ =$$



$$+ =$$



정답