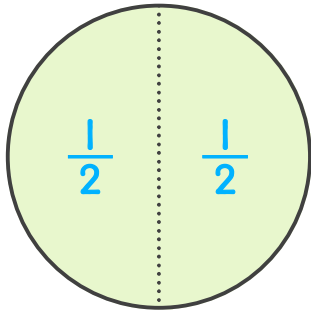
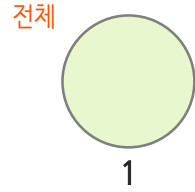
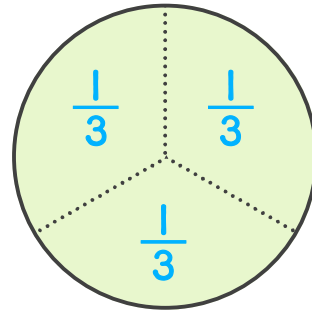


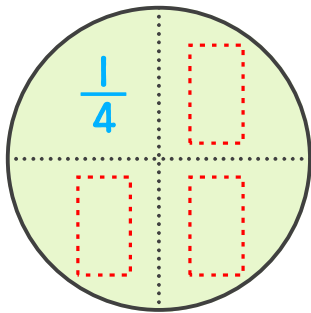
☺    안에 알맞은 단위분수를 쓰세요.  
그리고 단위분수가 몇 개이면 1(전체)이 되는지 쓰세요.



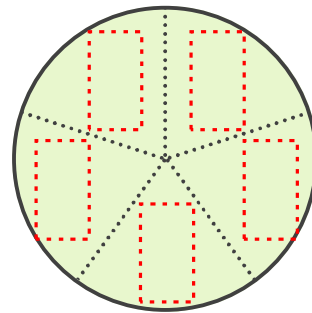
$\frac{1}{2}$  이 2 개이면 1입니다.



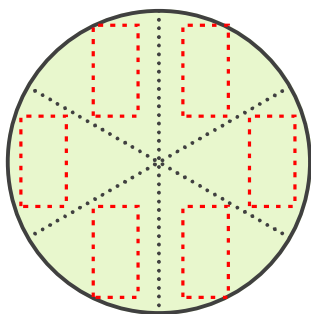
$\frac{1}{3}$  이    개이면 1입니다.



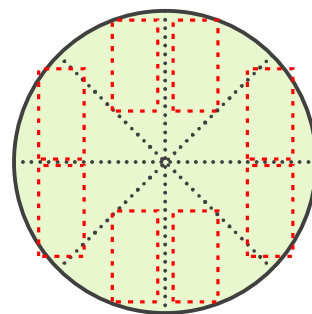
$\frac{1}{4}$  이    개이면 1입니다.



$\frac{1}{5}$  이    개이면 1입니다.



$\frac{1}{6}$  이    개이면 1입니다.



$\frac{1}{8}$  이    개이면 1입니다.

