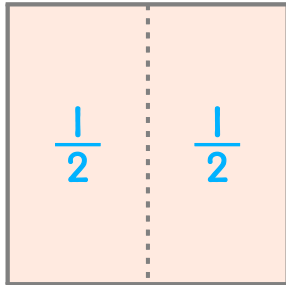
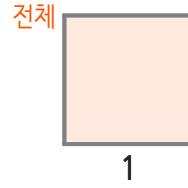
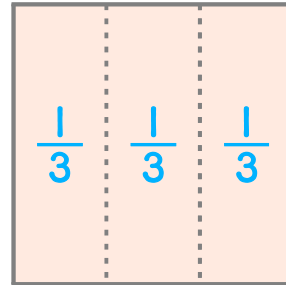


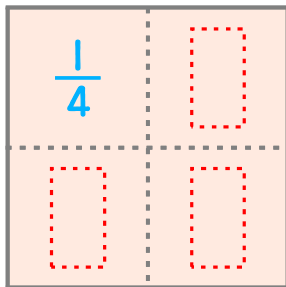
☺ □ 안에 알맞은 단위분수를 쓰세요.
 그리고 단위분수가 몇 개이면 1(전체)이 되는지 쓰세요.



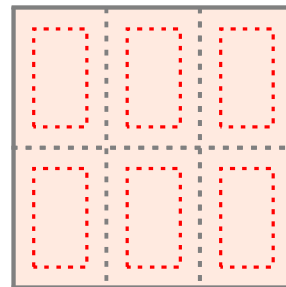
$\frac{1}{2}$ 이 2 개이면 1입니다.



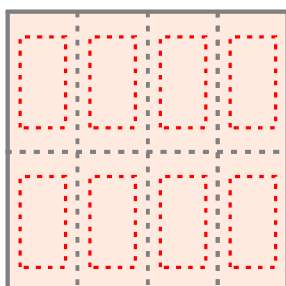
$\frac{1}{3}$ 이 □ 개이면 1입니다.



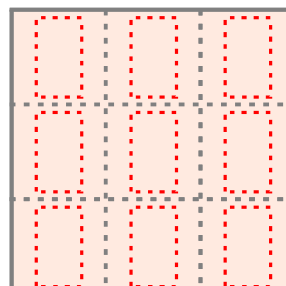
$\frac{1}{4}$ 이 □ 개이면 1입니다.



$\frac{1}{6}$ 이 □ 개이면 1입니다.



$\frac{1}{8}$ 이 □ 개이면 1입니다.



$\frac{1}{9}$ 이 □ 개이면 1입니다.

