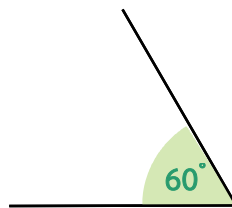
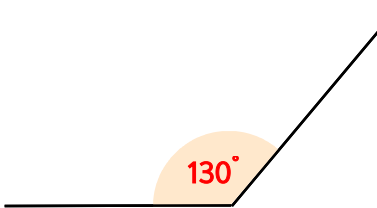
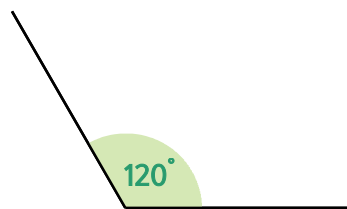
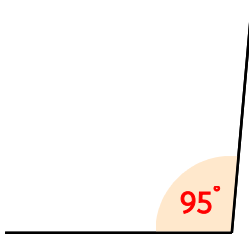


☺ 각도의 합과 차를 구하세요.



$130^\circ + 60^\circ = \underline{\hspace{2cm}}$

$130^\circ - 60^\circ = \underline{\hspace{2cm}}$



$95^\circ + 120^\circ = \underline{\hspace{2cm}}$

$120^\circ - 95^\circ = \underline{\hspace{2cm}}$

$140^\circ + 60^\circ = \underline{\hspace{2cm}}$

$88^\circ + 100^\circ = \underline{\hspace{2cm}}$

$140^\circ - 60^\circ = \underline{\hspace{2cm}}$

$100^\circ - 88^\circ = \underline{\hspace{2cm}}$

