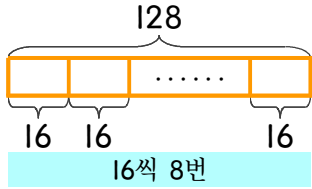
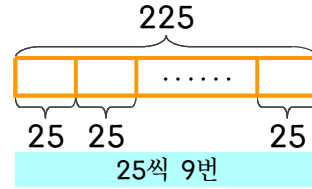


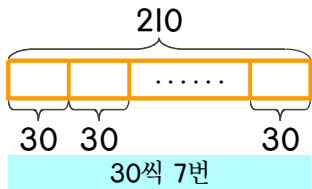
☺ 그림을 보고 나눗셈식과 곱셈식으로 나타내세요.



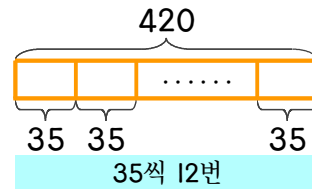
- ① 나눗셈식  
 $128 \div 16 = 8$
- ② 곱셈식  
 $16 \times 8 = 128$



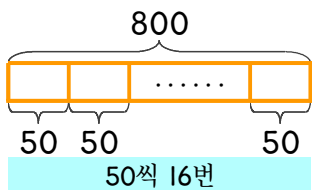
- ① 나눗셈식
- ② 곱셈식



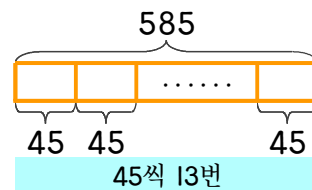
- ① 나눗셈식
- ② 곱셈식



- ① 나눗셈식
- ② 곱셈식



- ① 나눗셈식
- ② 곱셈식



- ① 나눗셈식
- ② 곱셈식

