
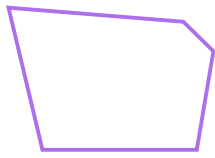



☺ 선분 4개로 둘러싸인 도형에 모두 ○ 하세요.



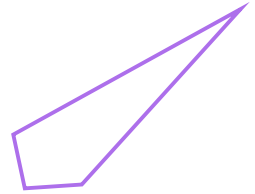
( ○ )



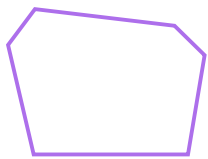
(   )



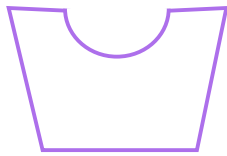
(   )



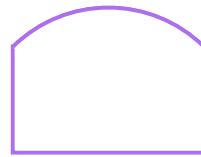
(   )




(   )



(   )



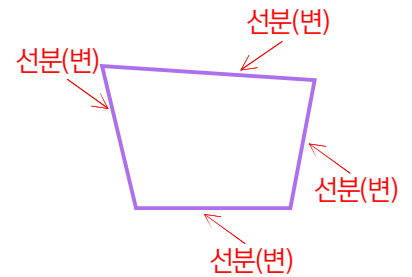
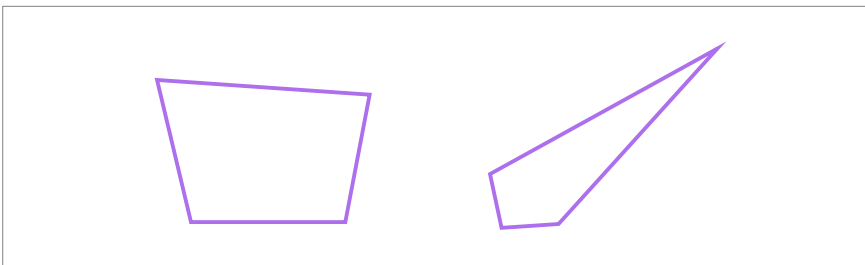
(   )



(   )

※ 문장을 소리 내어 읽고 따라 쓰세요.

☺ 선분 4개로 둘러싸인 도형을 사각형 이라고 합니다.




※ 평면도형을 이루는 선분을 **변**이라고 합니다.

☺ 사각형이 아닌 이유에 ○ 하세요.



( 선분 4개가 아니다, 둘러싸인 도형이 아니다 )



( 선분 4개가 아니다, 둘러싸인 도형이 아니다 )



( 선분 4개가 아니다, 둘러싸인 도형이 아니다 )

정답

