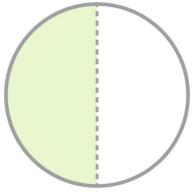
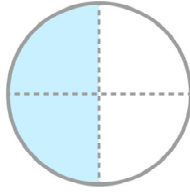


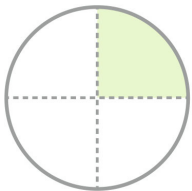
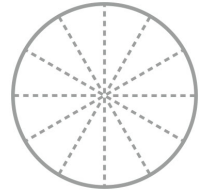
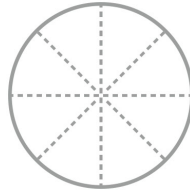
☺ 왼쪽에 있는 분수와 크기가 같은 분수가 되도록 색칠하고 분수를 쓰세요.



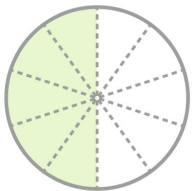
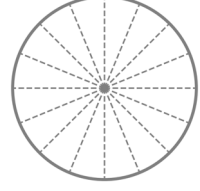
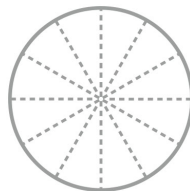
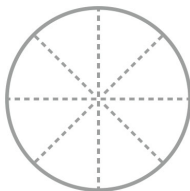
$$\frac{1}{2}$$



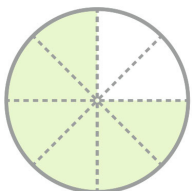
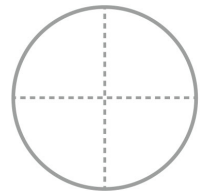
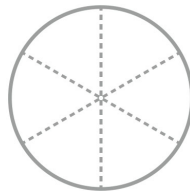
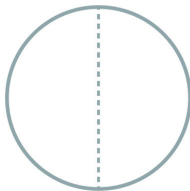
$$\frac{2}{4}$$



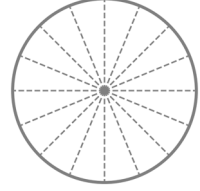
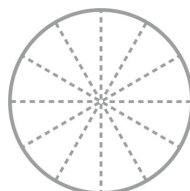
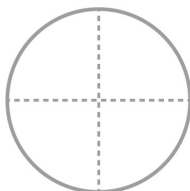
$$\frac{1}{4}$$



$$\frac{5}{10}$$



$$\frac{6}{8}$$



정답

