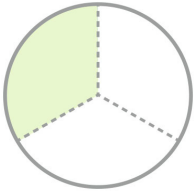
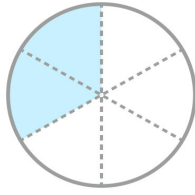


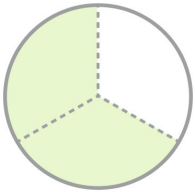
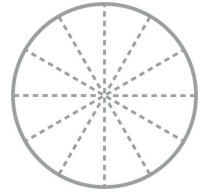
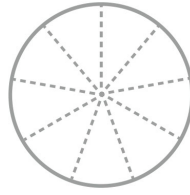
☺ 왼쪽에 있는 분수와 크기가 같은 분수가 되도록 색칠하고 분수를 쓰세요.



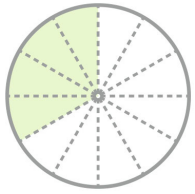
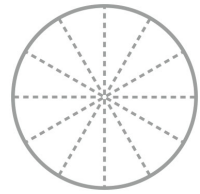
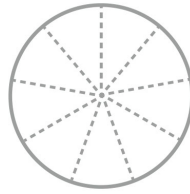
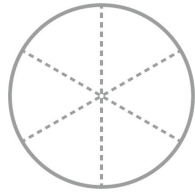
$$\frac{1}{3}$$



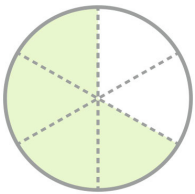
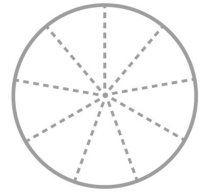
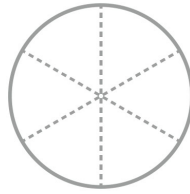
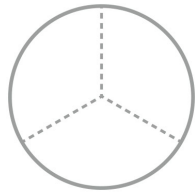
$$\frac{2}{6}$$



$$\frac{2}{3}$$



$$\frac{4}{12}$$



$$\frac{4}{6}$$

