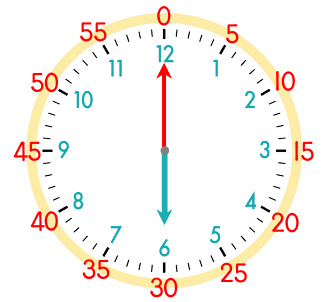
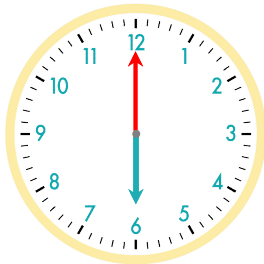


긴바늘이 한 바퀴 돌면서 눈금 60개를 이동 : 60분
 60분 동안 짧은바늘은 숫자 1개를 이동 : 1시간

60분 = 1시간

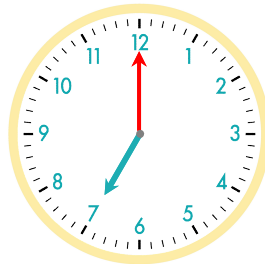


☺ 주어진 시각은 몇 시인지 쓰세요. 그리고 몇 시간 후의 시각을 쓰고, 시계에 나타내 보세요.



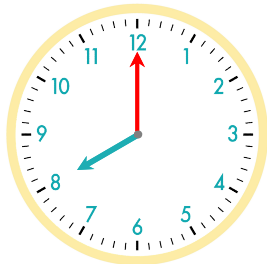
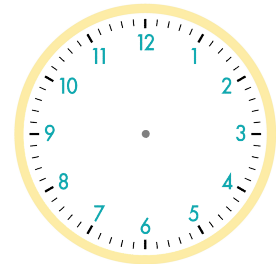
6시

1시간 후



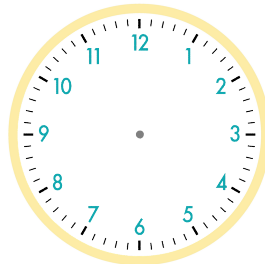
7시

1시간 후

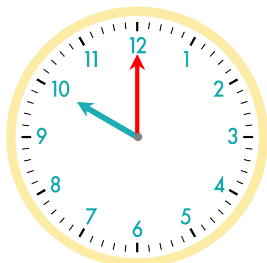
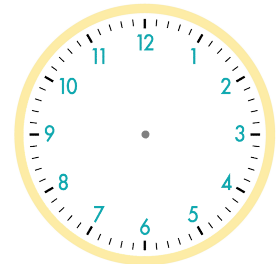


8시

1시간 후

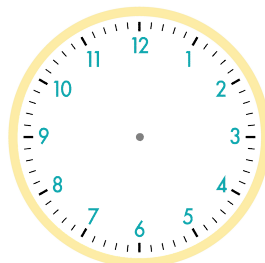


1시간 후

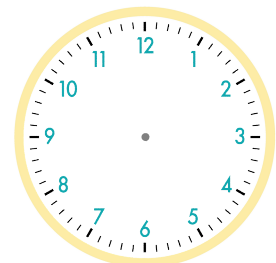


10시

2시간 후



3시간 후



정답

