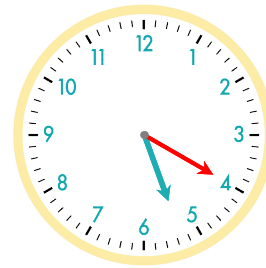




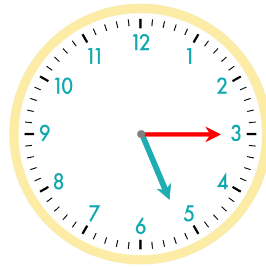
20분 후
긴바늘이 눈금 20개를 이동



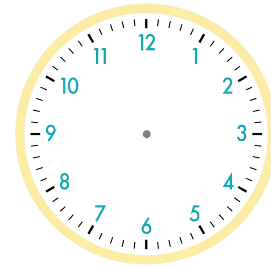
☺ 주어진 시각은 몇 시 몇 분인지 쓰세요. 그리고 몇 분 후의 시각을 쓰고, 시계에 나타내 보세요.



15분 후

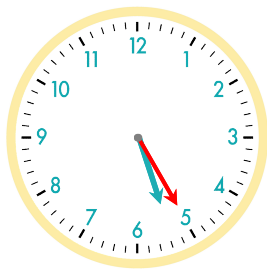


10분 후

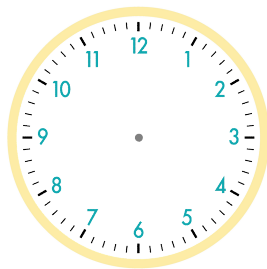


5시

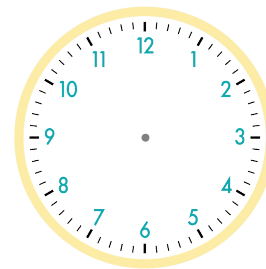
5시 15분



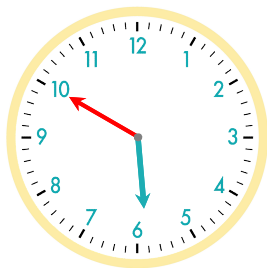
15분 후



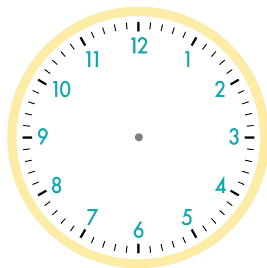
10분 후



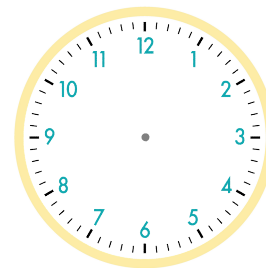
5시 25분



5분 후



15분 후



5시 50분

정답

