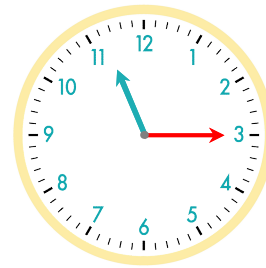
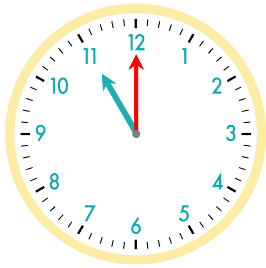


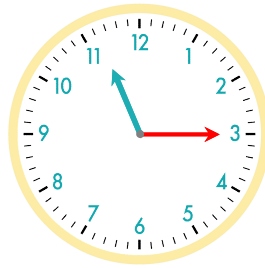
15분 후  
간바늘이 눈금 15개를 이동



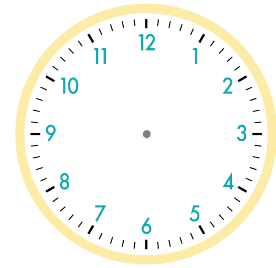
☺ 주어진 시각은 몇 시 몇 분인지 쓰세요. 그리고 몇 분 후의 시각을 쓰고, 시계에 나타내 보세요.



15분 후



5분 후

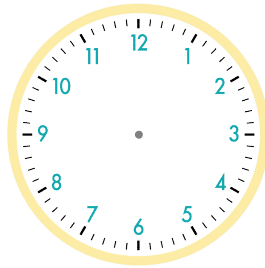


11시

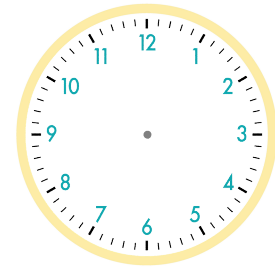
11시 15분



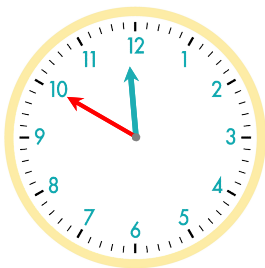
5분 후



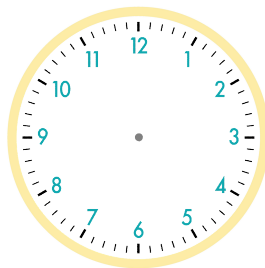
25분 후



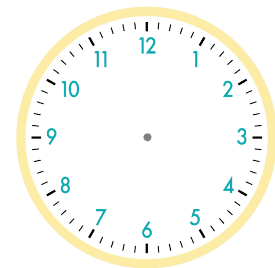
11시 20분



5분 후



15분 후



11시 50분

정답

